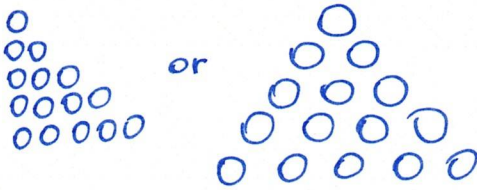



Interleaved practice

Number:

1. Draw 15 counters arranged as a triangle.



2. Two flowers were growing. Each had 17 petals. How many petals altogether? Show how you did it.


examples  34 petals



3. What number comes before 267? 266

Measurement/Geometry:

4. Draw a picture of a clock face. Show the time as half-past three.



5. What day was it before yesterday?

Tuesday (provided you are answering this on Thursday)

6. Use triangles, rectangles and circles to draw a building.

Accept any attempt using triangles, rectangles and circles.

Chance/Data:

7. Use tally marks to show how many days we have had so far this month, and how many days are yet to come.

This will vary depending on when you are completing this worksheet.
Allow your child to use a calendar to work it out.