

[Contents – click on the link below](#)

[How to use this work program](#)

Accessing the online resources

Running the program each week

Getting help

[What you need to know this week](#)

Week overview

Students need to work out:

We are also hoping that students will learn over the next few years:

You will need the following objects:

Monday: At-Home Investigation

Tuesday: Connecting Lesson

Wednesday: At-home Investigation

Thursday: Interleaved Practice Questions

Friday: Connecting Lesson

How to use this work program

Accessing the online resources

To access the online resources, please go to: <https://www.backtofrontmaths.com.au/b2fmathshome>

Running the program each week

Each week is designed with five maths lessons so that you can do it each day. Different days have different types of lessons to make sure that students experience the kind of thinking that they need to continue growing in maths. The types of lessons include:

- **At-home investigation:** This is a hands-on task where students explore a new idea before they are taught that skill. They need to come up with an idea to try to solve the problem, try out their idea, decide if it worked or not, try again if needed, and explain what they did. If your child has time with your teacher with a webcam, the teacher will generally be doing this lesson with your child. This is the lesson that will require the heaviest input from you to help your child think through an idea and generally requires the use of some hands-on materials that are listed in the information page.
- **Connecting lesson:** This type of lesson has questions that lead students to develop their ideas and learn a new skill. It should be fairly easy for a student to do, but you will need to be available to read the question to your child as needed, encourage them to think further, and make sure that they complete the work. Most of these lessons will include 10 minutes of practising number operations or concepts through activities or games.
- **Interleaved practise lesson:** This type of lesson provides 8-10 questions from different areas of maths so that students practise remembering what they have previously been taught. Some of the questions may not be easy for your child, so feel free to help whenever you see them struggling.
- **Generalising lesson:** This lesson contains some extension material for use if your child found the week's lessons too easy. *If you would prefer*, you can spend this lesson playing more of the number games that are included in the connecting lesson or giving your child time to complete any of the lessons that they have not yet done.

Getting help

The website above will have answers to frequently asked questions as well as videos to help you successfully teach your child at home. If you have further questions or need support, please contact your child's teacher directly using the contact details that they have provided to you. If they can't answer your questions, they will contact the B2FMaths@Home team directly to get an answer within 3 days.

What you need to know this week

Week overview

This week we are teaching the concept of **2D shape and angles**. In particular, we are focusing on angles in 2D shapes as this is the “C” standard.

Students need to work out:

- Squares and rectangles have right angles (square corners). Opposite sides are equal in length and parallel. Squares are rectangles with the same length sides.
- Angles are measures of turn and are measured in degrees.
- Right angles are “square”. Angles can be classified as smaller than right angles (acute), between right angles and straight angles (obtuse), or larger than straight angles (reflex).
- “Regular” shapes have sides and angles that are equal. For example, a regular 4-sided shape is a square. A regular octagon looks like a stop sign.
- When naming shapes, the prefix tends to refer to the number of sides or angles.
 - Tri = 3: a tricycle has 3 wheels, a triceratops has 3 horns, a triangle has 3 angles or 3 straight sides (tri = 3, angle = angles)
 - Quad = 4: a quad-bike has 4 wheels, a quadrilateral has 4 sides (quad = 4, lateral = refers to lengths or sides). Squares, rectangles, parallelograms and trapeziums are some types of quadrilaterals.
 - Pent = 5: a pentagon has 5 sides, a pentagram is a 5-pointed star. The sides do not have to be the same length.
 - Hex = 6: a hexagon has 6 sides. The sides do not have to be the same length.
 - Oct = 8: an octagon has 8 sides, an octopus has 8 legs. The sides of an octagon do not have to be the same length.
- For all straight-sided 2D shapes, the angles will add up to be the same amount of degrees. The angles of a triangle add to 180° because if you tear the triangle apart and line up the corners, it makes a straight line (see the video).
- How to classify types of triangles by their side lengths and angles
- 3D objects can be represented by 2D drawings. One way to do this is to draw a “net”, which would fold up and connect to form the object.

We are also hoping that students will learn over the next few years:

- Which angles are the same when a set of parallel lines (lines running in the same direction) is cut by a line running in a different direction (called a transversal)
- How to classify types of quadrilaterals (4 sided shapes) by their lengths and angles
- How to draw 3D objects from different views

You will need the following objects:


- A protractor for measuring angles. This might look like half a circle with lines and a measurement going around the outside: NB we will be making one on Monday using a sheet of paper and a plate to trace around. If you have a real one, it would be great to have that available to check how accurate the one we make is.
- Some small 3D objects that students can use to trace around each face (e.g. a block or box for a rectangular prism, an ice-cream cone to be a cone, an empty roll to be a cylinder)

Monday: At-Home Investigation

Making a protractor and measuring angles**You will need:**


- Paper to fold to make a protractor
- Scissors
- A small plate or bowl
- Protractor if you have one


Here is a photo showing how to make a protractor. If you fold each 30° angle in half again, you will have 15° sections. This is close enough for estimating angles for this task and the next few.



Once you have made your protractor together, use it to measure/estimate the angles on the work sheet. If you can, emphasise the relationship between the number of pieces you are folding into, fractions, and the angle (e.g. folding into 6 pieces is sixths, that is the same as $360^\circ \div 6$, or 60°)

Ell. Using a protractor

 Use a 360° protractor to measure the following angles, and write the number of degrees beside each one. Remember to include measurements for both the inside and outside angles.



Use a 360° protractor to draw the following angles. Write the measurement beside each angle.

1. 55°
2. 105°
3. 155°
4. 205°
5. 255°
6. 300°
7. 355°

BACKWARDS QUESTION:

What would an angle of 450° look like?

Tuesday: Connecting Lesson

Number task for 10-15 minutes: *Finding a total*

Choose a number between 10 and 50. *Please note, 24 and 36 are the easiest, 41 and 37 are particularly hard.*

Roll a dice 4 times to get 4 numbers, or just pick any 4 numbers between 1 and 8.

Try to use those numbers to get as close as possible to your target number.

Rules:

- Not all 4 numbers have to be used
- A number can only be used once
- Use any operation you like (+ - x ÷) and any others that you know (e.g. powers or square roots, ! etc.)

Try at least 3 numbers.

Worksheet task:

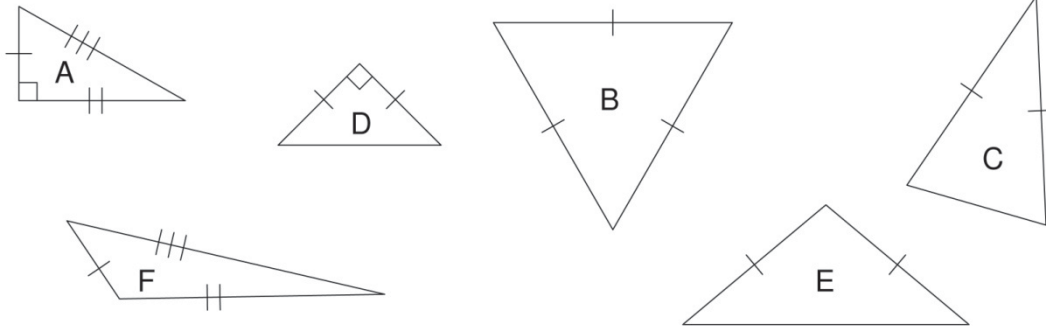
This lesson is about comparing and classifying triangles. It teaches students about triangles that have equal sides and angles (equilateral), that have two sides the same length and two angles the same size (isosceles), and those that have three different length sides and angles (scalene).

The lines on each side are there to show you if they are the same (will have the same number of marks) or if they are different (different numbers of marks). For example, shape B has all three sides the same. We suggest that your child reinforce what they did with length last week by measuring each side, and also measure each angle. You can then explain what the marks mean afterwards.

K7. Subfamilies of triangles

Families of shapes have subfamilies. Compare the family of shapes shown below. Answer the questions to group these into subfamilies.

Write the letter of the shapes which fit into the following subfamilies. Some of the shapes are in multiple subfamilies.



Triangles: All closed shapes that have three straight sides

Equilateral triangles: Triangles that have three equal sides, and three equal angles

Isosceles triangles: Triangles that have two equal sides and two equal angles

Scalene triangles: Triangles that have three different sides and three different angles

Right angled triangles: Triangles that have a right angle

BACKWARDS QUESTION:

What category would the following triangle be: side of 3cm, side of 4cm and a side of 5cm. Draw it and measure the angles. Give reasons for your answer:

Wednesday: At-home Investigation

This lesson allows your child to think about how 3D objects can be represented with 2D shapes.

You will need:

- Some small 3D objects such as:
 - A rectangular prism or a cube (box for cards, box of baking powder, dice)
 - A cylinder (empty cardboard roll, spice jar, can of tomatoes)
 - Something with a triangular face if you can find one (Toblerone, a pyramid)
- Lots of paper (you can use old paper, newspaper or recycling)
- Scissors and tape
- Camera or phone to take a photo of the original object and the folded-up-net next to it.

Students will need to make “nets” of the shapes you provide. They can do this by tracing around each face, turning the shape, then tracing the next face etc. You might also like to consider cutting down an old cereal box to see how it would fold up to make the box.

Number task for 10-15 minutes: *Multiplication grid below*

X	3	4	5	6	7	8	9
3							
4							
5							
6							
7							
8							
9							

Record your time here for the 49 questions:

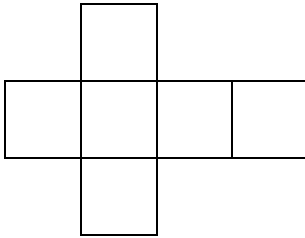
Mark your answers using a calculator or with an adult. Circle any that are wrong.

At-Home Investigation

Come up with a plan to make a net of some 3D shapes in your house

My plan:

Find one object with square or rectangular faces to draw, one with a circular face, and one with a triangular face if you can. Think about what shapes are on each of the faces, and how you might create a “net” for the object that would fold up to make it. To help you get started, the net below would fold up to make a cube.



Sketch what you think a net might look like for each of your objects here:

Carry out my plan:

Using your objects, trace around each face carefully. Make sure that they attach along the right edges so that they will fold up correctly. Take a photo of each net with the original object, once you have cut out the net and folded it up. Attach the photo here or email it to your teacher.

Extend your learning:

Measure each side length and angle of your net. Record the measurements here.

Thursday: Interleaved Practice Questions

Why we are using mixed up questions:

In this lesson your child will be reviewing a range of skills that they have learned previously. Each question is unrelated to the previous question, because we want your child to have to *think hard* about what to do. Mixing up questions like this, rather than just practising related questions, has been shown in research to improve student retention of concepts by 60% over a 4 month period.

What to expect:

Your child will probably have forgotten how to complete quite a few of the questions. If needed, change the numbers in each question to make them easier because this will still require your child to think hard and remember a process. If they still can't work it out, feel free to show them, but try using different numbers rather than the exact same question. There are answers to each question on the website in case you get stuck.

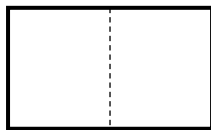
Interleaved practice

Number:

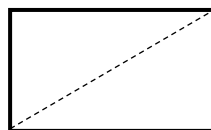
1. Complete the following number sequence: 208 , 205 , ____, ____, 196 , ____, ____, 187
2. $21\,457 + \underline{\hspace{2cm}} = 30\,634$
3. Write down all of the factors of 48. Draw arrays that show the factors you have listed?
4. What number comes after 3 519 099?
5. How many weeks would it take to save up for a new skateboard that costs \$58.90 if you earn \$12 per week pocket money?

Measurement/Geometry:

6. Use a ruler or tape measure to find the length of 5 objects that are longer than 30cm and shorter than a metre. Write the name of the objects and their length here.
7. What time will it be in 110 minutes? Write your answer in analogue and 24-hour time.
8. The dotted line in shape 1 shows a line of symmetry. It is not a line of symmetry in shape 2. Why not? Draw a different line of symmetry in shape 3



shape 1



shape 2



shape 3

Chance/Data:

9. Choose 5 different types of toys and work out how many you have. Design a table to record your findings.

Friday: Connecting Lesson

Worksheet task:

This lesson is about comparing and classifying nets and deciding what 3D object they would represent. It involves applying what your child learned yesterday about nets, but this time using the 2D representation to predict the 3D object rather than the other way around.

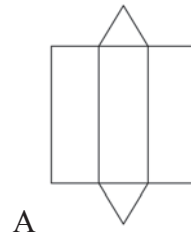
K9. Predicting the shape from the net

It is often useful to be able to tell which 3D shape goes with which net. You can tell which ones match by their properties such as the number and shape of their faces, and their angles.

Look at the pictures of the 3D shapes below. Answer the questions about each, then write which net would fold to give that shape.

Cube:

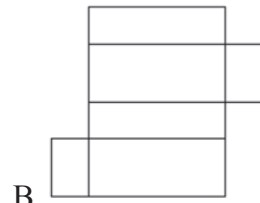
1. How many faces does it have?
2. What shape are the faces?
3. What is special about the angles?



A

Rectangular Prism:


1. How many faces does it have?
2. What shape are the faces?
3. What is special about the angles?



B

Triangular Prism:

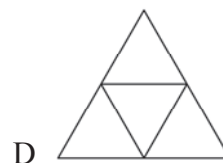
1. How many faces does it have?
2. What shape are the faces?
3. What observations can you make about the angles?



C

Triangular Pyramid:

1. How many faces does it have?
2. What shape are the faces?
3. What observations can you make about the angles?




D

BACKWARDS QUESTION:

What shape other than a cube would have 6 faces with at least 5 congruent?

Identifying cube nets

Examine the diagrams below and circle the nets that would fold to give a cube.



BACKWARDS QUESTION:

Draw three nets that would fold to give the same triangular pyramid: